



vul de som in en reken het antwoord uit



$$\dots + \dots = \dots$$





$$\dots + \dots = \dots$$



$$\dots + \dots = \dots$$



$$\dots + \dots = \dots$$



$$\dots + \dots = \dots$$