



Enter the numbers and calculate the answer



$$\dots + \dots = \dots$$





$$\dots + \dots = \dots$$



$$\dots + \dots = \dots$$



$$\dots + \dots = \dots$$



$$\dots + \dots = \dots$$